



Sorteer : wat kan ?
wat kan niet ?



de zon is geel.	de koe eet een vis.
de koe zit in de schuur.	de maan is rood.
in de school zit een aap.	de muis in huis.
ik eet een peer.	de boot is in het bos.
de vos eet een kip.	jan leest een boek.
de kip eet een pier.	de zee is nat.
ik ruik aan een roos.	de boot is op zee.
in de soep is zout.	een jas met een gat.
de deur is toe.	wim loopt rap.
de vis eet de reus op.	de poes is rood.
de mol is op het dak.	een schoen in een vaas.
de kip eet een vos.	de uil eet ijs.
an leest een doek.	de mouw loopt weg.
fik eet een doos op.	lies valt in de kuil.
de man eet zeep.	bas eet een pier.

Optellen en aftrekken tot 9



1+2=
4-3=

Kleef 'Wat past los op'

<input type="radio"/> <input type="radio"/> <input type="radio"/>	$5+4 =$	$1+4 =$	$1+5 =$
---	---------	---------	---------

<input type="radio"/> <input type="radio"/> <input type="radio"/> <input type="radio"/> <input type="radio"/>	$9-2 =$	$9-3 =$	$9-6 =$
---	---------	---------	---------

<input type="radio"/> <input type="radio"/> <input type="radio"/> <input type="radio"/> <input type="radio"/>	$9-4 =$	$9-2 =$	$9-5 =$
---	---------	---------	---------

<input type="radio"/> <input type="radio"/> <input type="radio"/> <input type="radio"/>	$3+4 =$	$5+4 =$	$5+3 =$
---	---------	---------	---------

<input type="radio"/> <input type="radio"/> <input type="radio"/> <input type="radio"/>	$6+1 =$	$2+4 =$	$2+6 =$
---	---------	---------	---------

<input type="radio"/> <input type="radio"/> <input type="radio"/> <input type="radio"/> <input type="radio"/>	$8-5 =$	$8-3 =$	$8-6 =$
---	---------	---------	---------

<input type="radio"/> <input type="radio"/> <input type="radio"/> <input type="radio"/>	$1+6 =$	$1+5 =$	$3+4 =$
---	---------	---------	---------

<input type="radio"/> <input type="radio"/> <input type="radio"/> <input type="radio"/>	$7-3 =$	$7-4 =$	$9-4 =$
---	---------	---------	---------

<input type="radio"/> <input type="radio"/> <input type="radio"/> <input type="radio"/>	$4+2 =$	$3+3 =$	$2+2 =$
---	---------	---------	---------

<input type="radio"/> <input type="radio"/> <input type="radio"/> <input type="radio"/> <input type="radio"/>	$9+0 =$	$4+5 =$	$3+2 =$
---	---------	---------	---------

naam _____

Aftrekken tot 9



1+2=
4-3=

los op

<input type="radio"/> <input type="radio"/> <input type="radio"/> <input type="radio"/>	$8-3 =$ <input type="checkbox"/>
---	----------------------------------

<input type="radio"/> <input type="radio"/> <input type="radio"/> <input type="radio"/>	$7-5 =$ <input type="checkbox"/>
---	----------------------------------

<input type="radio"/> <input type="radio"/> <input type="radio"/> <input type="radio"/>	$6-4 =$ <input type="checkbox"/>
---	----------------------------------

<input type="radio"/> <input type="radio"/> <input type="radio"/> <input type="radio"/>	$5-5 =$ <input type="checkbox"/>
---	----------------------------------

<input type="radio"/> <input type="radio"/> <input type="radio"/> <input type="radio"/>	$9-3 =$ <input type="checkbox"/>
---	----------------------------------

<input type="radio"/> <input type="radio"/> <input type="radio"/> <input type="radio"/>	$9-5 =$ <input type="checkbox"/>
---	----------------------------------

<input type="radio"/> <input type="radio"/> <input type="radio"/> <input type="radio"/>	$9-1 =$ <input type="checkbox"/>
---	----------------------------------

<input type="radio"/> <input type="radio"/> <input type="radio"/> <input type="radio"/>	$9- =$ <input type="checkbox"/>
---	---------------------------------

<input type="radio"/> <input type="radio"/> <input type="radio"/> <input type="radio"/>	$-0 =$ <input type="checkbox"/>
---	---------------------------------

<input type="radio"/> <input type="radio"/> <input type="radio"/> <input type="radio"/>	$- =$ <input type="checkbox"/>
---	--------------------------------

doorschrijf en los op

<input type="radio"/> <input type="radio"/> <input type="radio"/> <input type="radio"/>	$7-4 =$ <input type="checkbox"/>
---	----------------------------------

<input type="radio"/> <input type="radio"/> <input type="radio"/>	$5-4 =$ <input type="checkbox"/>
---	----------------------------------

<input type="radio"/> <input type="radio"/> <input type="radio"/> <input type="radio"/>	$9-6 =$ <input type="checkbox"/>
---	----------------------------------

<input type="radio"/> <input type="radio"/> <input type="radio"/> <input type="radio"/>	$7-6 =$ <input type="checkbox"/>
---	----------------------------------

<input type="radio"/> <input type="radio"/> <input type="radio"/> <input type="radio"/>	$9-4 =$ <input type="checkbox"/>
---	----------------------------------

<input type="radio"/> <input type="radio"/> <input type="radio"/>	$5-3 =$ <input type="checkbox"/>
---	----------------------------------

<input type="radio"/> <input type="radio"/> <input type="radio"/> <input type="radio"/>	$9-9 =$ <input type="checkbox"/>
---	----------------------------------

<input type="radio"/> <input type="radio"/> <input type="radio"/> <input type="radio"/>	$8-5 =$ <input type="checkbox"/>
---	----------------------------------

<input type="radio"/> <input type="radio"/>	$4-1 =$ <input type="checkbox"/>
---	----------------------------------

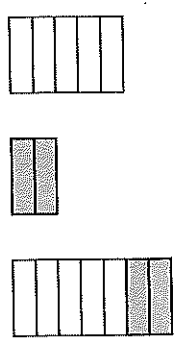
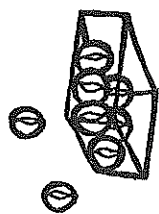








<input type="radio"/> <input type="radio"/>	$3-2 =$ <input type="checkbox"/>
---	----------------------------------

naam _____

Optellen en aftrekken tot 9

1+2=
4-3=

los op.

	
$5 + 2 = \square$	$8 - 2 = \square$
	
$3 + 6 = \square$	$9 - 4 = \square$
	
$4 + 5 = \square$	$8 - 7 = \square$
	
$6 + 2 = \square$	$7 - 5 = \square$
	
$7 + 1 = \square$	$6 - 4 = \square$













Herhalen : de getallen tot 10 en splitsen tot 9



volle getal









$0 \quad 1 \quad \square \quad 3 \quad \square \quad 5 \quad \square \quad 7 \quad \square \quad 9 \quad \square$
$0 \quad \square \quad 2 \quad \square \quad 4 \quad \square \quad 6 \quad \square \quad 8 \quad \square \quad 10$
$3 \quad 4 \quad \square \quad \square \quad 6 \quad \square \quad \square \quad 8$
$5 \quad \square \quad \square \quad \square \quad 8 \quad \square \quad \square$

Kies > of < of =

			
$5 \quad \square \quad 7$	$7 \quad \square \quad 7$	$7 \quad \square \quad 7$	$7 \quad \square \quad 7$
			
$9 \quad \square \quad 6$	$7 \quad \square \quad 2$	$7 \quad \square \quad 2$	$7 \quad \square \quad 2$
			
$8 \quad \square \quad 8$	$3 \quad \square \quad 5$	$3 \quad \square \quad 5$	$3 \quad \square \quad 5$

Optellen tot 9

1+2=□
4+3=□


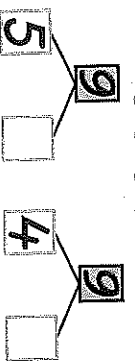



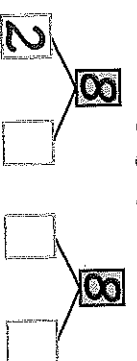





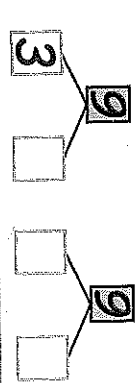

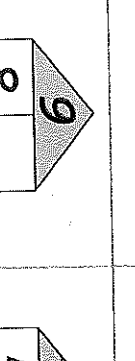


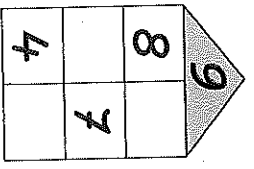
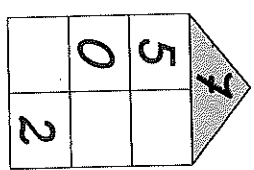
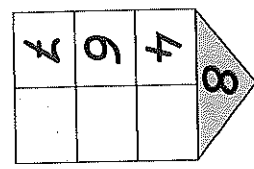
100 900		
	4 + 5 = □	5 + 4 = □
	2 + 7 = □	7 + 2 = □
	6 + 3 = □	3 + 6 = □
	3 + 5 = □	5 + 3 = □
	4 + 4 = □	
	2 + 6 = □	6 + □ = □
	4 + 3 = □	3 + □ = □
	5 + 2 = □	□ + □ = □

naam _____

Spplitsen tot 9



100 900

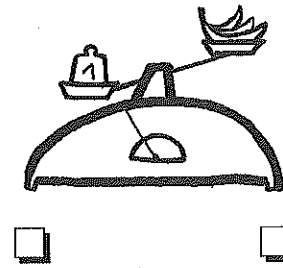
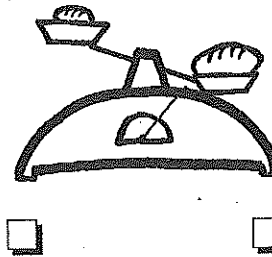


			
			
			
			
			

naam _____

Meetcircuit i.v.m. meter, liter en kilogram als conventionele maateenheden



kruis dan wat het meest weegt.



kruis dan wat past.



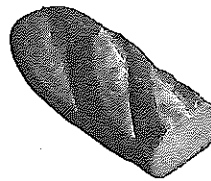
- m
- l
- kg



- m
- l
- kg



- m
- l
- kg



- m
- l
- kg